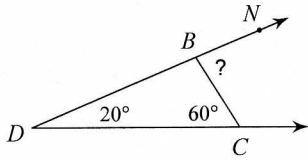


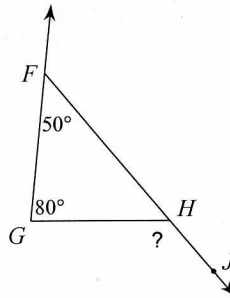
7-3 Triangle Exterior Angle Theorem (ver1)\_hw

Find the measure of each angle indicated.

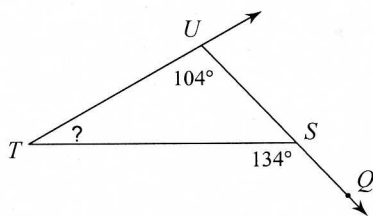
1)



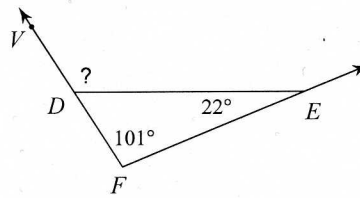
2)



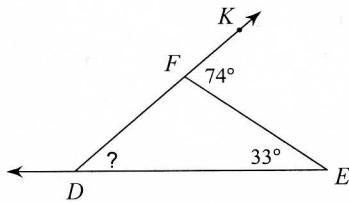
3)



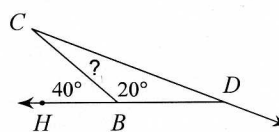
4)



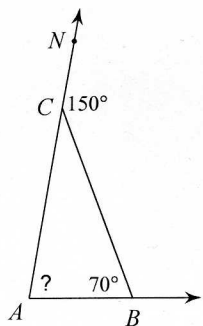
5)



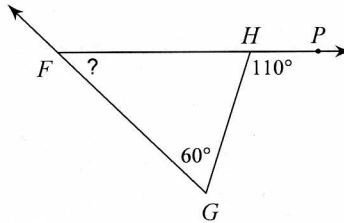
6)



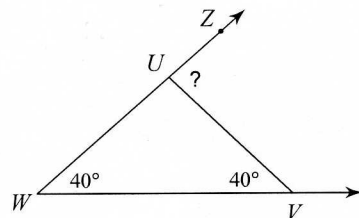
7)



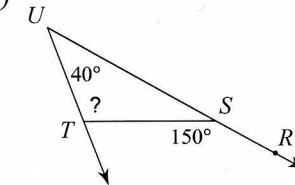
8)



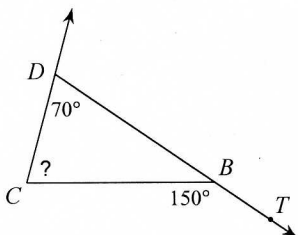
9)



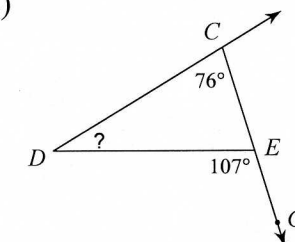
10)



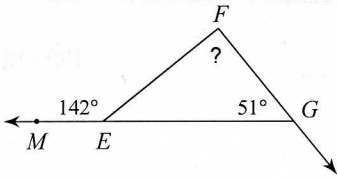
11)



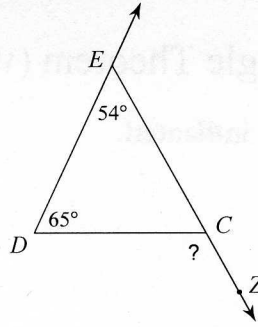
12)



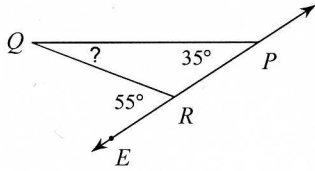
13)



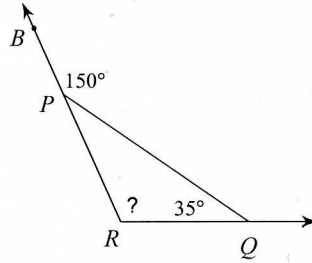
14)



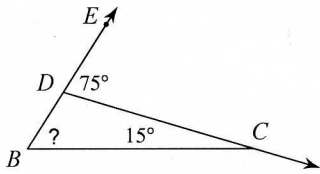
15)



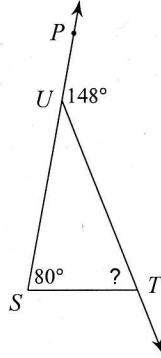
16)



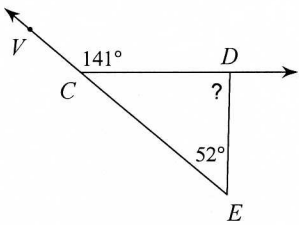
17)



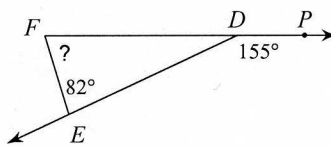
18)



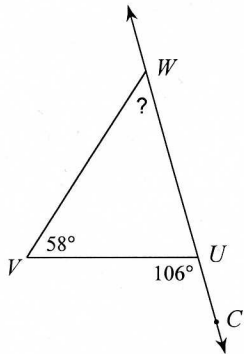
19)



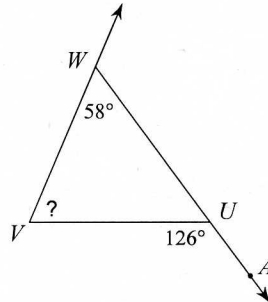
20)



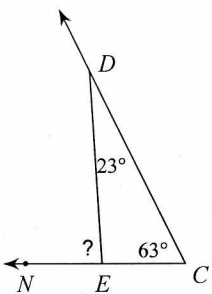
21)



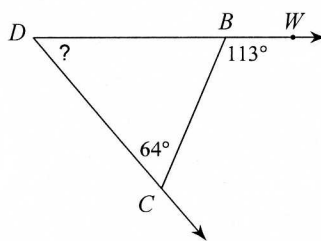
22)



23)



24)



Answers to 7-3 Triangle Exterior Angle Theorem (ver1)\_hw

- 4) 123°
- 8) 50°
- 12) 31°
- 16) 115°
- 20) 73°
- 24) 49°

- 5) 30°
- 7) 80°
- 11) 80°
- 15) 20°
- 19) 89°
- 23) 86°

- 2) 130°
- 6) 20°
- 10) 110°
- 14) 119°
- 18) 68°
- 22) 68°

- 1) 80°
- 5) 41°
- 9) 80°
- 13) 91°
- 17) 60°
- 21) 48°